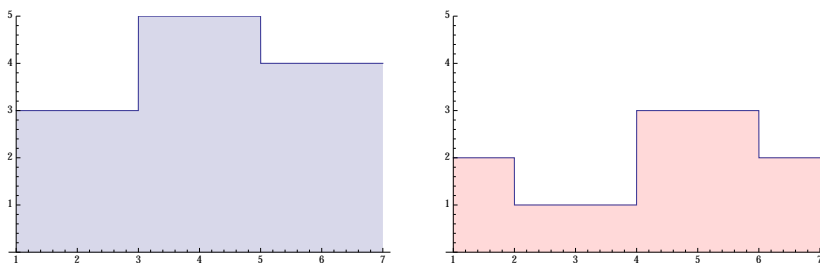


Problem 1. Let $s : [1, 7] \rightarrow \mathbb{R}$ and $t : [1, 7] \rightarrow \mathbb{R}$ be step functions given by

$$s(x) = \begin{cases} 3 & \text{if } 1 < x < 3 \\ 5 & \text{if } 3 < x < 5 \\ 4 & \text{if } 5 < x < 7 \end{cases} \quad t(x) = \begin{cases} 2 & \text{if } 1 < x < 2 \\ 1 & \text{if } 2 < x < 4 \\ 3 & \text{if } 4 < x < 6 \\ 2 & \text{if } 6 < x < 7 \end{cases}$$

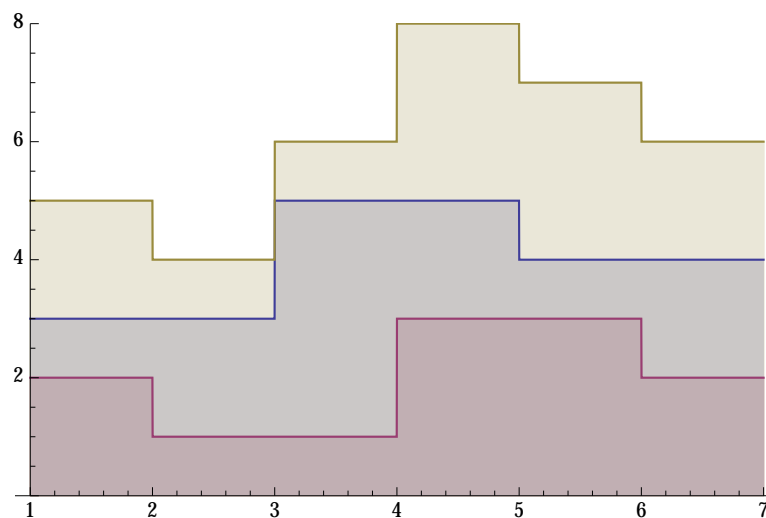
(a) Sketch the graphs of s and t .

Answer.



(b) Describe $s + t$ and sketch its graph.

$$(s + t)(x) = \begin{cases} 5 & \text{if } 1 < x < 2 \\ 4 & \text{if } 2 < x < 3 \\ 6 & \text{if } 3 < x < 4 \\ 8 & \text{if } 4 < x < 5 \\ 7 & \text{if } 5 < x < 6 \\ 6 & \text{if } 6 < x < 7 \end{cases}$$



- (c) Find a partition of $[1, 7]$ for which s, t , and $s + t$ are constant on its open subintervals.

Answer. $\mathcal{P} = \{1, 2, 3, 4, 5, 6, 7\}$.

- (d) Compute the integrals $\int_1^7 s$, and $\int_1^7 t$, $\int_1^7 s + t$.

Answer.

$$\begin{aligned}\int_1^7 s &= 3(2) + 5(2) + 4(2) = 24 \\ \int_1^7 t &= 2(1) + 1(2) + 3(2) + 2(1) = 12 \\ \int_1^7 s + t &= 5(1) + 4(1) + 6(1) + 8(1) + 7(1) + 6(1) = 36.\end{aligned}$$

- (e) You should have found that $\int_1^7 s + t = \int_1^7 s + \int_1^7 t$. Give a step by step arithmetic argument to show explicitly that

$$\int_1^7 s + t = \int_1^7 s + \int_1^7 t.$$

Answer. We use the partition $\mathcal{P} = \{1, 2, 3, 4, 5, 6, 7\}$ and compute

$$\begin{aligned}\int_1^7 s + \int_1^7 t &= (3(2-1) + 3(3-2) + 5(4-3) + 5(5-4) + 4(6-5) + 4(7-6)) \\ &\quad + (2(2-1) + 1(3-2) + 1(4-3) + 3(5-4) + 3(6-5) + 2(7-6)) \\ &= ((3+2)(2-1) + (3+1)(3-2) + (5+1)(4-3) + (5+3)(5-4) + (4+3)(6-5) + (4+2)(7-6)) \\ &= \int_a^7 s + t\end{aligned}$$

Problem 2. Read sections 1.16-1.17 in Apostol.

Problem 3. Let $f : [0, 1] \rightarrow \mathbb{R}$ be given by

$$f(x) = \begin{cases} 1 & \text{if } x \in \mathbb{Q} \\ 2 & \text{if } x \in [0, 1] \setminus \mathbb{Q} \end{cases}$$

Compute $\bar{I}(f)$ and $\underline{I}(f)$, the upper and lower integrals of f over the interval $[0, 1]$.

Answer. Let

$$S = \left\{ \int_0^1 s : s \text{ is a step function with } s \leq f \right\}.$$

Suppose s is a step function satisfying $s \leq f$. Since there are rational numbers in every open interval, $s \leq 1$ so $\int_0^1 s = 1$. So, 1 is an upper bound for S . Since the constant function 1 is a step function less than f and $\int_0^1 s = 1$, $1 \in S$. We conclude that $\underline{I}(f) = \sup S = 1$.

Let

$$T = \left\{ \int_0^1 t : t \text{ is a step function with } f \leq t \right\}.$$

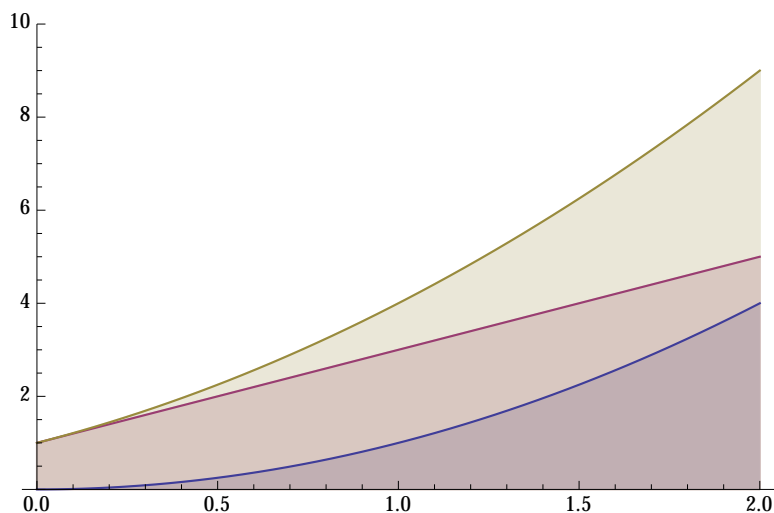
Suppose t is a step function satisfying $f \leq t$. Since there are irrational numbers in every open interval, $2 \leq t$ so $\int_0^1 t \geq 2$. Thus 2 is a lower bound for T . Since the constant function 2 is a step function satisfying $2 \leq f$, the number $2 = \int_0^1 2 \in T$. We conclude that $\bar{I}(f) = \inf T = 2$.

Problem 4. Read sections 1.18-1.27 in Apostol.

Problem 5. Let $f(x) = x^2$ and $g(x) = 2x + 1$.

- (a) Sketch a picture of the graphs of f , g , and $f + g$ over the interval $[0, 2]$.

Answer.



- (b) Compute $\int_0^2 f$, $\int_0^2 g$, and $\int_0^2 f + g$.

Answer. For $\int_0^2 x^2$, we use the fact that for any $p \in \mathbb{N}$, we have $\int_0^b x^p = \frac{b^{p+1}}{p+1}$. So,

$$\int_0^2 x^2 = \frac{2^3}{3} = \frac{8}{3}.$$

To compute $\int_0^2 2x + 1$, use the fact that the integral computes the area of the ordinate set and observe that the ordinate set is comprised of a triangle of area height 4 and width 2 on top of a rectangle of width 2 and height 1. So,

$$\int_0^2 2x + 1 = 6.$$

For the last integral, we use the fact that the integral is additive over sums:

$$\int_0^2 x^2 + 2x + 1 = \int_0^2 x^2 + \int_0^2 2x + 1 = \frac{8}{3} + 6.$$